






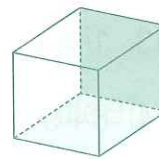







MONDAY

- What is the time? 
- $7 + 4 =$
- $11 - 3 =$
- $7 + 5 =$ 
- Name this 2-D shape.
- Is this line horizontal or vertical? 
- Name this 2-D shape. 
- IX (Roman numeral) =
- $3^2 = 3 \times 3 =$
- $300 + 200 =$
- $40 - 10 =$
- Matt the barber cut the hair of 12 boys on Monday and 12 boys on Tuesday. Write the total number of boys who had a haircut.
- $1 \text{ m} =$ cm
- Would you drink a metre or a litre of milk?
- Round 143 to the nearest ten.
- $16 \div 8 =$ or $8 \times = 16$
- Write the number sentences for Question 12.
 $\times =$ or
 $+$ =
- $8 \times 3 =$
- If a baby uses 5 nappies in a day, how many will be used in one week?
- 3, 8, 13, 18, Rule: add 



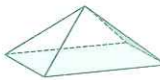
TUESDAY

- The time is a past 
- 4 chickens each laid 3 eggs. How many eggs altogether. Complete the number sentence for this problem.
 $\times =$ eggs
- $10 \times 7 =$
- Name this 3-D shape. 
- $4^2 = 4 \times 4 =$
- Would you eat a kilometre or kilogram of grapes?
- Round 115 to the nearest ten.
- $16 \div 4 =$ or $4 \times = 16$
- $42 - 10 =$
- $15 - 9 =$
- 3, 7, 12, 18,
- $14 - 7 =$
- Name this 3-D shape. 
- $\$5.50 - \$5.00 =$
- A hexagon has sides.
- Which direction is this? 
☐ clockwise ☐ anticlockwise
- How many days are in December?
- What number comes after 49?
- Which is longer, 1 cm or 1 m?
- $80 + 30 =$ 

WEDNESDAY

- The time is a to 
- $8 \times 4 =$ or $4 \times 8 =$
- $3 \times 6 =$ or $6 + 6 + 6 =$
- $43 - 10 =$
- $16 - 9 =$
- $58 + 10 =$
- A octagon has sides.
- $500 + 500 =$
- Ben the biscuit packer packed 8 boxes on Monday and 6 boxes on Tuesday. How many boxes did he pack?
- Write the number sentence for Question 9.
 $+$ =
- A triangle has sides.
- Round 129 to the nearest ten.
- 18, 17, 16, 15,
- $50 \div 5 =$ or $5 \times = 50$
- $\$10.00 - \$8.50 =$
- Is this a polygon? 
- VII (Roman numeral) =
- How many months are in a year?
- Which is longer 1 mm or 1 cm?
- Seven cyclists need new tyres for their bikes. How many tyres altogether? 

THURSDAY

- What is the time? 
- $35 \div 7 =$ or $7 \times = 35$
- $2 + 9 =$
- $100 + 85 =$
- $55 + 10 =$
- Name this 3-D shape. 
e
- Is January in spring, winter, autumn or summer?
- $1 \text{ cm} =$ mm
- Round 72 to the nearest ten.
- Is this a sphere? 
- $12 - 6 =$
- Kieren had 21 toy cars. He had 3 boxes and he shared the cars evenly to all boxes. How many cars are in each box?
- If you have a dozen eggs and break 4 how many are left?
- $11 \times 7 =$
- V (Roman numeral) =
- How many weeks are in a year?
- Write the number sentence for Question 12.
 $\div =$
- 3, 6, 9, 12,
- A pentagon has sides.
- $4 \times 9 =$ or
 $9 + 9 + 9 + 9 =$